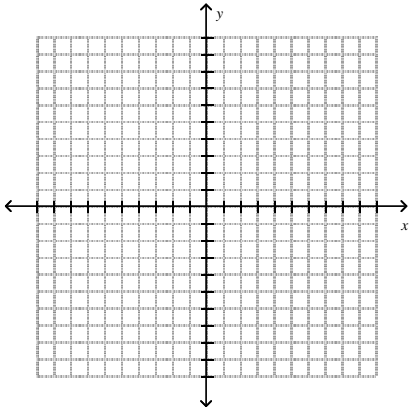
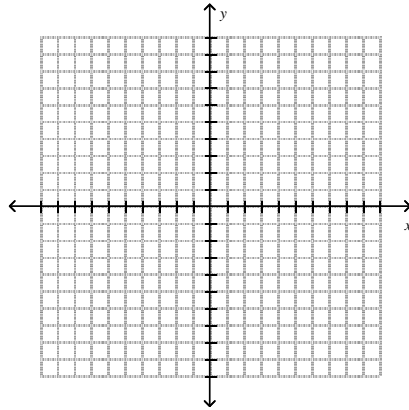


Graph each equation or inequality.  
Identify the slope and y-intercept.

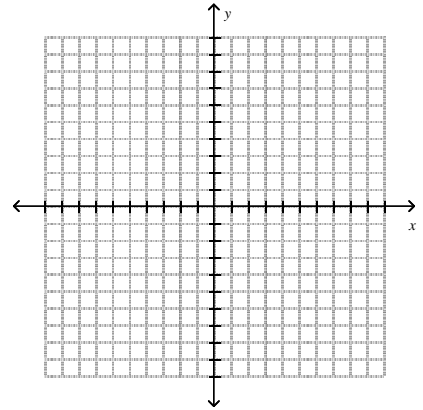
1)  $y = \frac{1}{2}x - 4$



2)  $y = -3x + 4$

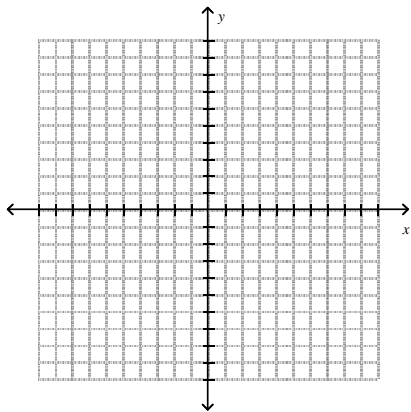


3)  $3x - 6y = 18$

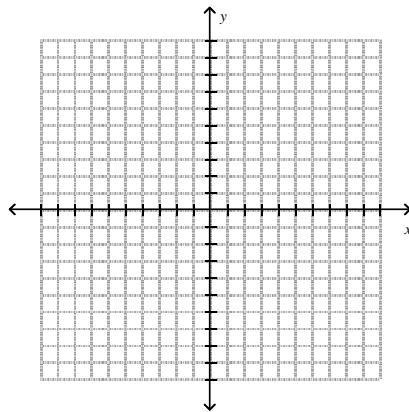


Use the x- and y-intercepts.

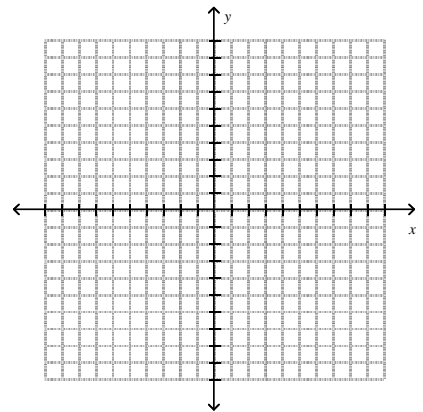
4)  $-2x + 3y = 9$



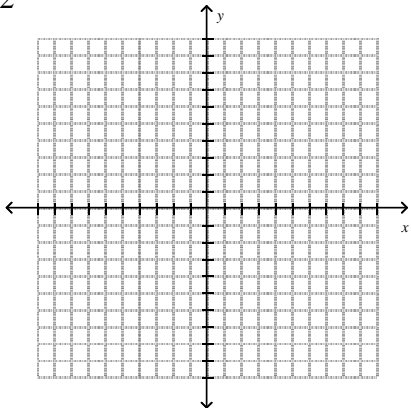
5)  $2x - 6y = 12$



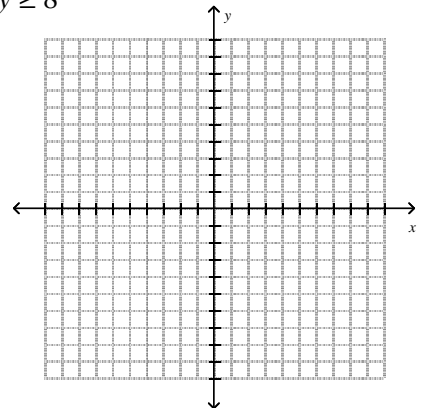
6)  $y = \frac{2}{3}x - 4$



7)  $y < 3x - 2$



8)  $3x + 2y \geq 8$



Write the equation of the line using the given information. Solve for  $y$  regardless of the method used!

Use Slope-Intercept Form

9)  $m = -1$ ,  $(4, 6)$

10) slope:  $0$ ,  $(-6, 2)$

11)  $(-7, 0)$ ,  $(-9, 3)$

Use Point-Slope Form

12)  $(1, 3)$ ,  $(7, 4)$

13)  $(-2, 3)$ ,  $(-2, -5)$

14)  $m = \frac{1}{2}$ ,  $(-4, 5)$

15) Write an equation of the line parallel to the line  $y = 2x - 5$  and passes through the point  $(-4, 8)$ .

16) Write an equation of the line perpendicular to the line  $2x - 5y = 10$  and passes through the point  $(-5, 7)$ .

---

**Solve the equation. Then, check your answer!**

1)  $x - 3 = -7$

2)  $-2x = 14$

3)  $\frac{4}{3}f = -16$

4)  $3x - 3 = 15$

5)  $-12 = \frac{2}{3}x - 6$

6)  $\frac{x}{-2} + 3 = 7$

7)  $-2 + 4x - 6x + 6 = -16$

8)  $40 = 14 + 2(4g - 3)$

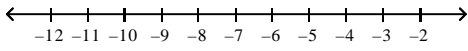
9)  $-3z - 1 = 17 + 3z$

10)  $4x - 12 = -2(5 - 3x)$

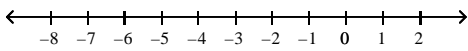
13) Dan purchased DVDs from a website. Each DVD costs \$11, and the shipping fees are \$6.95. Dan paid a total of \$50.95. How many DVDs did he buy?

Solve and graph each inequality.

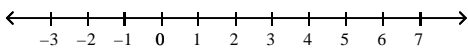
14)  $x + 3 < -4$



16)  $4 > -3x - 14$



18)  $-4 < -3x + 8 < 11$



Solve each equation.

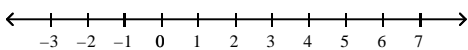
20)  $|2c + 5| = 21$

21)  $|2x - 4| + 12 = 10$

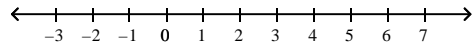
22)  $2|x - 3| = 4$

Solve and graph each inequality.

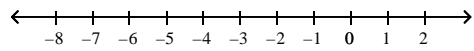
23)  $|3f - 9| + 5 > 11$



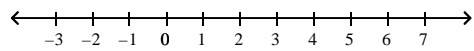
15)  $-2x \geq -6$



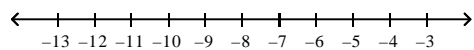
17)  $3(y + 1) < 3y + 7$



19)  $9s - 6 < 12$  or  $3s + 1 > 13$



24)  $5|d + 8| - 7 < 13$



First, write the polynomial in standard form. Then, identify the degree, leading coefficient, and classify by the number of terms.

1)  $-4 + 5y^2$

2)  $-6 - 8x^3 + 7x$

Find the sum or difference.

3)  $(x^2 - 3x + 5) + (11x + 2x^2 - 1)$

4)  $(8y^3 - 7y^2 + y) - (-5y - 9y^2 + 7)$

Find the product.

5)  $3x^2(x^3 - 5x^2 + 6x - 2)$

6)  $(2x - 5)(x + 8)$

7)  $(x + 3)(-2x^2 + 5x - 1)$

8)  $(2x - 1)(x + 2)(x - 6)$

9)  $(3x - 4)(3x + 4)$

10)  $(5x + 1)^2$

11)  $(2x - 5)(2x + 5)$

12)  $(3x - 4)^3$

13)  $(3x + 2)^3$

**Factor the trinomial. (Take out a GCF first, if possible)**

1)  $x^2 + 8x + 7$

2)  $x^2 - 7x + 10$

3)  $x^2 - 12x - 13$

4)  $x^2 + 10x + 25$

5)  $x^2 + 13x + 36$

6)  $x^2 - 5x - 24$

7)  $-x^2 - 3x + 28$

8)  $2x^2 + 15x + 7$

9)  $5x^2 - 18x - 8$

10)  $-3x^2 - 17x - 10$

11)  $10x^2 - 26x + 12$

12)  $-4x^2 + 6x + 4$

13)  $16x^2 - 40x + 25$

14)  $4x^2 - 9$

15)  $8x^2 + 24x + 18$

16)  $50x^2 - 18$

17)  $x^3 - x$

18)  $3x^2 - 18x + 27$

**Simplify each expression.**

1)  $(3d^{-2})^5(5d^3)^{-4}$

2)  $(-1a^5b^2)^4(6a^{-4})$

3)  $(-2d^3e^3)(6d^4e^{-7})$

4)  $\frac{6x^{-2}y^6}{(3xy^3)^2}$

5)  $(3f^4g^{-3})^3(f^2g^{-2})^{-1}$

6)  $(4x^4)^3(2xy^3)^2$

7)  $(a^3b^4)^{-2}(a^{-3}b^{-5})^0$

8)  $\frac{(3x^{-2}y^3)^{-2}}{(4yz^2)^{-4}}$

9)  $\left(\frac{p^{-3}q^{-2}}{2q^{-3}r^5}\right)^4$

10)  $\frac{x^7y^9z^{-3}}{y^7z^4x^8}$

11)  $\left(\frac{5a^0b^4}{c^{-3}}\right)^{-2}$

12)  $\frac{x^4y^{-8}z^{-2}}{x^{-1}y^6z^{-10}}$